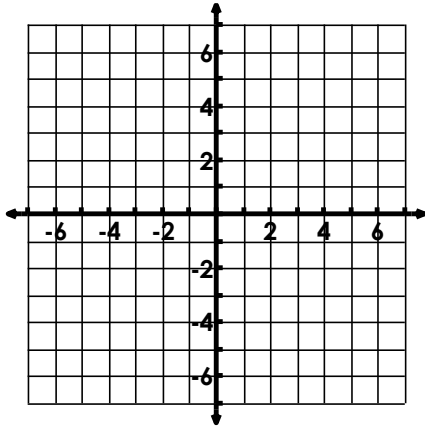
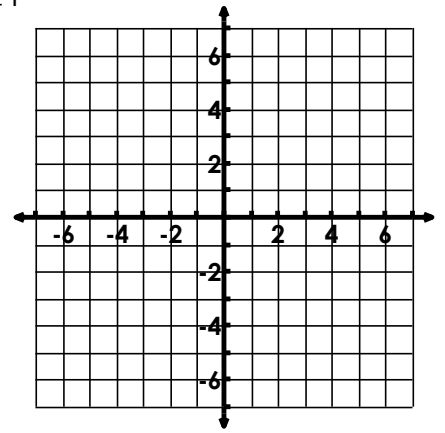


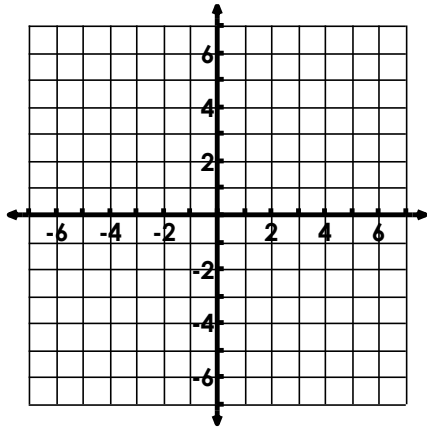
1. $f(x) = -\sqrt{x} + 1$



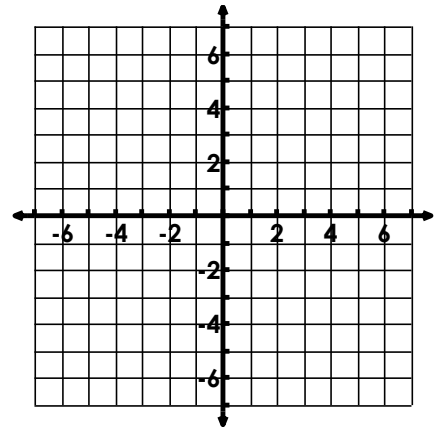
2. $f(x) = -\sqrt[3]{-x} + 1$



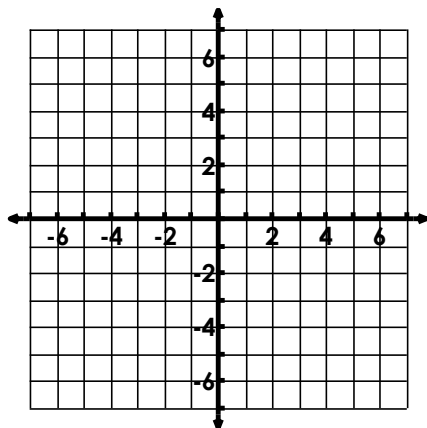
3. $f(x) = 2\sqrt{-x} - 3$



4. $f(x) = \frac{2}{5}\sqrt[3]{x} - 1$



5. $f(x) = \frac{1}{3}\sqrt{x}$



6. $f(x) = 2\sqrt[3]{-x} - 2$

